

MADINAH ISLAMIC JUNIOR SCH, NSANGI
RECESS WORK TERM I 2020
SOCIAL STUDIES & RELIGIOUS EDUCATION

Name: _____

1. Name one element of a good map

.....

2. What are physical features?

.....

3. State one crop grown in a swampy area

.....


4. Why should one keep his money in a bank?

.....


5. State one way in which lake Victoria is useful to the people of Uganda

.....

6. What is the name of the drawn map symbol?



.....



.....

7. A Chairperson heads a local council as a head teacher heads a

.....

8. Name the manmade lake in your division

.....

9. Write one work of your class teacher

.....

10. Name one insect eaten by people around your community

.....

11. Why do police officers put on uniform?

.....

12. Give one benefit of airport to people.

.....

13. State any one way of locating places in your district.

.....

14. What name is given to the symbol shown below



.....

15. Give the meaning of the word fishing

.....

16. Name any one cardinal point of a compass

.....

17. Name the district which is the capital city of Uganda

.....

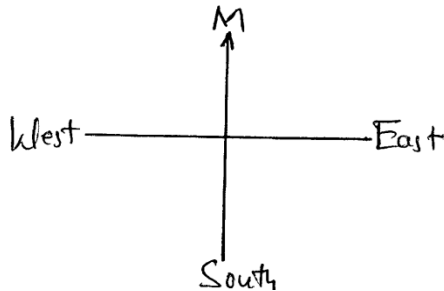
18. What is the danger of too much sunshine?

19. How do most teachers in your school manage rainy weather?

20. Give one reason why people move from villages to town.

21. Name the largest lake in Uganda

22. Complete the compass direction below



23. Mention one condition of weather suitable for harvesting crops

24. Give one use of a radio at home?

25. Give another name for wetlands

26. Why do people rear rabbits in their home

27. Write UPE in full

28. Name one island district you know

29. Give one important place in your sub county

30. Mention one cash crop you know

31. Name one land form in your area

32. Who heads a family

33. Who was the father of Gipir and Labongo according to Luo migration?

34. Name the current lord mayor of Kampala district

For questions 36-40, answer either Christianity or Islamic but not both in the same number

35. **Either:** where were Adam and eve living before they disobeyed God

Or: who is an imam

36. **Either:** Which son of Adam killed his brother

Or: State any one thing a Muslim is supposed to do during the period of fasting.

37. **Either:** What miracle did Jesus perform at Canana

.....
Or: What was the original colour of the stone in Kaaba?
.....

38. **Either:** Whom did God sent to deliver the children of Israel; from slavery in Egypt?

.....
Or: Point out any one condition that can spoil Zakat
.....

39. **Either:** Name the mother of Jesus Christ?

.....
Or: Name the mother of Prophet Muhammad.
.....

SECTION B

40. According to the story of Kintu

.....
a. What did nimbi forget that brought suffering on earth?
.....

b. Who is believed to be the first Muganda
.....

c. Who was the bad brother of nambi
.....

d. How many cows had Kintu?
.....

41. What is a swamp?

.....
b) Give two uses of swamps to people?
.....


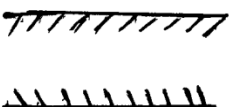

c) State one raw materials obtained from swamps for the craft industry
.....

42. Identify the capital city of Uganda

.....
a) Apart from Rubaga division in Kampala.
.....

b) Who is the executive director of Kampala capital city authority
.....

43. Name the following map symbols

.....
		

b) Why are symbols used?
.....

44. Who do people grow food crops

b) Name any two food crops grown in your district

c) Name any two products from sun flower area

i.

ii.

45. Study the map below and answer questions that follow



a. Name lakes marked A,B and C

i.

A

ii.

B

iii.

C

b. Identify game park marked P

c. Give one important feature marked A to the community

46. List down three groups of people who use a compass at their place of work

i.

iii.

ii.

b) Explain the term compass rose

47. List down two types of roads

i.

ii.

b) Name three means of air transport

i.

iii.

ii.

48. Write any two sources of water

i.

ii.


b) Write down one danger of water to people

c) Give two types of rivers in Uganda

i.

ii.

49. Use the diagram below to answer questions that follow



a. Name the type of rain fall shown in the diagram below

b. Mention the process taking place at:

i. A.....

ii. B.....

c. In which one way does the rainfall positively affect people's activities?

For questions 51-55, answer either Christianity or Islam but not both in a number

50. **Either:** Name any four apostles in the bible

i.

ii.

iii.

iv.

51. **Or:** Name four prophets in the Quran

i.

ii.

iii.

iv.

52. **Either:** Where do christens go for prayers

b) Give two reasons why Christians pray

i.

ii.

c) Name the person who leads prayers in the Christian church

Or: Where do Muslims go for prayers

b) Give any two reasons why Muslims pray

i.

ii.

53. **Either:** God created living things at the same time

a. List down two kinds of living things God created

i.

ii.

b. When did God rest according to God's creation

c. Name any two commandments God gave to Moses

- i.
- ii.

Or: What name is given to Muslim man after visiting Mecca?

b) How many times do Muslims pray in a day?

c) Name three things created by Allah

- i.
- ii.
- iii.

54. **Either:** Give a reason why Moses was chosen to lead the Israelites

b) Write down any two problems faced by Israelites on their way to the Promised Land

- i.
- ii.

Or: Write down two reasons why Muslims pay Zakat

- i.
- ii.

b) Give two categories of people who are supposed to receive Zakat

- i.
- ii.

BOTH

55. What is suffering?

a) Identify any two causes of suffering

- i)
- ii)

c) Suggest one effect of suffering